




Addition




$$5 + 3 = \square$$




$$3 + 2 = \square$$



$$4 + 5 = \square$$



$$3 + 4 = \square$$



$$4 + 2 = \square$$